

GRADE

2

SUMMER packet

STUDENT PAGES

Let's get ready for 3rd grade!


NAME:

DIRECTIONS:

When you complete a page in the summer review pack, have an adult check your answers. Then color in the matching page number below. If you complete the summer review packet, return it to your 2nd grade teacher at the beginning of the school year to show off your hard work!

10	20	30	40	50
9	19	29	39	49
8	18	28	38	48
7	17	27	37	47
6	16	26	36	46
5	15	25	35	45
4	14	24	34	44
3	13	23	33	43
2	12	22	32	42
1	11	21	31	41

FAST MATH - SUBTRACTION



Solve these SUBTRACTION problems as fast as you can.

$$\begin{array}{r} 13 \\ - 6 \\ \hline \end{array}$$

$$\begin{array}{r} 13 \\ - 4 \\ \hline \end{array}$$

$$\begin{array}{r} 19 \\ - 7 \\ \hline \end{array}$$

$$\begin{array}{r} 15 \\ - 4 \\ \hline \end{array}$$

$$\begin{array}{r} 13 \\ - 4 \\ \hline \end{array}$$

$$\begin{array}{r} 16 \\ - 6 \\ \hline \end{array}$$

$$\begin{array}{r} 14 \\ - 3 \\ \hline \end{array}$$

$$\begin{array}{r} 15 \\ - 6 \\ \hline \end{array}$$

$$\begin{array}{r} 13 \\ - 7 \\ \hline \end{array}$$

$$\begin{array}{r} 14 \\ - 5 \\ \hline \end{array}$$

$$\begin{array}{r} 9 \\ - 4 \\ \hline \end{array}$$

$$\begin{array}{r} 13 \\ - 4 \\ \hline \end{array}$$

$$\begin{array}{r} 14 \\ - 3 \\ \hline \end{array}$$

$$\begin{array}{r} 7 \\ - 6 \\ \hline \end{array}$$

$$\begin{array}{r} 12 \\ - 6 \\ \hline \end{array}$$

$$\begin{array}{r} 13 \\ - 3 \\ \hline \end{array}$$

$$\begin{array}{r} 15 \\ - 7 \\ \hline \end{array}$$

$$\begin{array}{r} 12 \\ - 7 \\ \hline \end{array}$$

$$\begin{array}{r} 13 \\ - 8 \\ \hline \end{array}$$

$$\begin{array}{r} 16 \\ - 5 \\ \hline \end{array}$$

$$\begin{array}{r} 12 \\ - 7 \\ \hline \end{array}$$

$$\begin{array}{r} 19 \\ - 6 \\ \hline \end{array}$$

$$\begin{array}{r} 15 \\ - 7 \\ \hline \end{array}$$

$$\begin{array}{r} 19 \\ - 7 \\ \hline \end{array}$$

$$\begin{array}{r} 14 \\ - 5 \\ \hline \end{array}$$

$$\begin{array}{r} 14 \\ - 6 \\ \hline \end{array}$$

$$\begin{array}{r} 12 \\ - 7 \\ \hline \end{array}$$

$$\begin{array}{r} 19 \\ - 8 \\ \hline \end{array}$$

$$\begin{array}{r} 18 \\ - 8 \\ \hline \end{array}$$

$$\begin{array}{r} 12 \\ - 6 \\ \hline \end{array}$$

$$\begin{array}{r} 16 \\ - 7 \\ \hline \end{array}$$

$$\begin{array}{r} 19 \\ - 8 \\ \hline \end{array}$$

$$\begin{array}{r} 15 \\ - 4 \\ \hline \end{array}$$

$$\begin{array}{r} 19 \\ - 7 \\ \hline \end{array}$$

$$\begin{array}{r} 15 \\ - 4 \\ \hline \end{array}$$

$$\begin{array}{r} 19 \\ - 8 \\ \hline \end{array}$$

$$\begin{array}{r} 16 \\ - 9 \\ \hline \end{array}$$

$$\begin{array}{r} 15 \\ - 7 \\ \hline \end{array}$$

$$\begin{array}{r} 15 \\ - 9 \\ \hline \end{array}$$

$$\begin{array}{r} 15 \\ - 3 \\ \hline \end{array}$$

IRREGULAR PLURAL NOUNS

2
GRAMMAR


Complete the sentences using the words in the box. But WATCH OUT because there are some words in the box that are not used correctly in English. Cross out the incorrect words.

teeth fish person tables houses mice mices house
dogs feet child tooth dog mouse people
fishes children tooths childs table

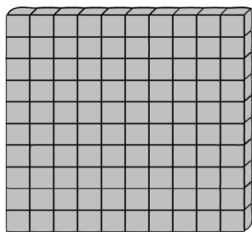
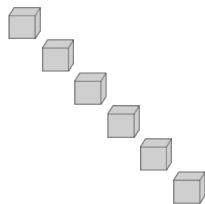
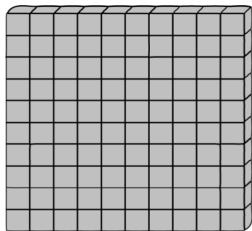
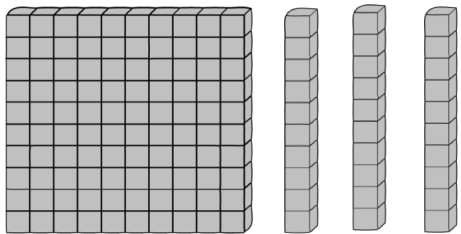
1. This morning while I was eating watermelon, my _____ fell out. That means I have lost 4 _____ now!
1. My camp counselor is a very nice _____ who loves to teach _____ how to have fun in nature..
1. I love to put my _____ in the sand and wiggle my toes.
2. When I was swimming in the ocean, I saw seven _____. They were colorful with pretty fins.
3. I told my mom that I saw a little, grey _____ sneaking a piece of cheese in the kitchen. Right when I told her, two more _____ ran across the room!
6. All of the _____ on that street have pretty yards.
7. We have two _____ but my mom won't let us get one more _____ because she is worried about them barking too much.
8. There are five _____ sitting at the dinner _____.
9. I am the oldest _____ in my family.



PLACE VALUE REVIEW



Lucas has these blocks. Andre gives him 5 more tens and five more ones. How many blocks does he have now? Draw your answer and write the number in the box.




Now Lucas has:

Now Lucas wants to have 500 blocks. How many more does he need to get to 500? Draw your answer and write the number in the box.

To get to 500, he needs:

PERFECT SUMMER DAY...

Write about the perfect summer day from morning until night.
Include at least four sentences.



Draw a picture to match your writing.

A large rectangular area defined by a dashed line, intended for a drawing that matches the student's writing.

FAST MATH - ADDITION

5
MATH

Solve these ADDITION problems as fast as you can.

$$\begin{array}{r} 1 \\ + 9 \\ \hline \end{array}$$

$$\begin{array}{r} 4 \\ + 1 \\ \hline \end{array}$$

$$\begin{array}{r} 2 \\ + 16 \\ \hline \end{array}$$

$$\begin{array}{r} 1 \\ + 7 \\ \hline \end{array}$$

$$\begin{array}{r} 2 \\ + 9 \\ \hline \end{array}$$

$$\begin{array}{r} 14 \\ + 2 \\ \hline \end{array}$$

$$\begin{array}{r} 1 \\ + 8 \\ \hline \end{array}$$

$$\begin{array}{r} 2 \\ + 15 \\ \hline \end{array}$$

$$\begin{array}{r} 3 \\ + 9 \\ \hline \end{array}$$

$$\begin{array}{r} 8 \\ + 4 \\ \hline \end{array}$$

$$\begin{array}{r} 3 \\ + 5 \\ \hline \end{array}$$

$$\begin{array}{r} 12 \\ + 4 \\ \hline \end{array}$$

$$\begin{array}{r} 13 \\ + 2 \\ \hline \end{array}$$

$$\begin{array}{r} 4 \\ + 9 \\ \hline \end{array}$$

$$\begin{array}{r} 11 \\ + 4 \\ \hline \end{array}$$

$$\begin{array}{r} 15 \\ + 3 \\ \hline \end{array}$$

$$\begin{array}{r} 4 \\ + 9 \\ \hline \end{array}$$

$$\begin{array}{r} 13 \\ + 4 \\ \hline \end{array}$$

$$\begin{array}{r} 8 \\ + 5 \\ \hline \end{array}$$

$$\begin{array}{r} 11 \\ + 6 \\ \hline \end{array}$$

$$\begin{array}{r} 12 \\ + 5 \\ \hline \end{array}$$

$$\begin{array}{r} 8 \\ + 4 \\ \hline \end{array}$$

$$\begin{array}{r} 10 \\ + 5 \\ \hline \end{array}$$

$$\begin{array}{r} 6 \\ + 5 \\ \hline \end{array}$$

$$\begin{array}{r} 8 \\ + 4 \\ \hline \end{array}$$

$$\begin{array}{r} 11 \\ + 8 \\ \hline \end{array}$$

$$\begin{array}{r} 7 \\ + 9 \\ \hline \end{array}$$

$$\begin{array}{r} 8 \\ + 10 \\ \hline \end{array}$$

$$\begin{array}{r} 9 \\ + 8 \\ \hline \end{array}$$

$$\begin{array}{r} 8 \\ + 8 \\ \hline \end{array}$$

$$\begin{array}{r} 9 \\ + 11 \\ \hline \end{array}$$

$$\begin{array}{r} 7 \\ + 8 \\ \hline \end{array}$$

$$\begin{array}{r} 8 \\ + 9 \\ \hline \end{array}$$

$$\begin{array}{r} 6 \\ + 9 \\ \hline \end{array}$$

$$\begin{array}{r} 10 \\ + 9 \\ \hline \end{array}$$

$$\begin{array}{r} 5 \\ + 9 \\ \hline \end{array}$$

$$\begin{array}{r} 10 \\ + 8 \\ \hline \end{array}$$

$$\begin{array}{r} 9 \\ + 4 \\ \hline \end{array}$$

$$\begin{array}{r} 12 \\ + 7 \\ \hline \end{array}$$

$$\begin{array}{r} 3 \\ + 9 \\ \hline \end{array}$$

PAST TENSE VERBS

6
GRAMMAR

Put the word that completes each phrase on the line. If you need a little hint, all of the words are included in the word box, but not all words from the word box are used.

had fell forgot brought ran lost knew opened cleaned
got sold washed asked played pushed jumped folded found
knocked hid brushed stomped thought kicked told paid

Today I **jump**. Yesterday I _____.

Today I **clean**. Yesterday I _____.

Today I **find**. Yesterday I _____.

Today I **fold**. Yesterday I _____.

Today I **think**. Yesterday I _____.

Today I **have**. Yesterday I _____.

Today I **tell**. Yesterday I _____.

Today I **stomp**. Yesterday I _____.

Today I **lose**. Yesterday I _____.

Today I **push**. Yesterday I _____.

Today I **get**. Yesterday I _____.

Today I **run**. Yesterday I _____.

Today I **sell**. Yesterday I _____.

PLACE VALUE REVIEW

7
MATH

WHAT IS JOSEPHINE'S HOUSE NUMBER?

852 825 815 936

The number is greater than 820.

It is less than 890.

There is a 5 in the tens place.

Josephine's house number is: _____

WHAT IS NATE'S HOUSE NUMBER?

648 662 647 654

The number is less than 660.

The number has a 4 in the tens place

It is the same as $600+40+3+5$

Nate's house number is _____


NOUN SEARCH!

8
GRAMMAR

Choose a book and find 14 different nouns (person, place, thing, or animal). Write the nouns in the space below.


Book Title:

Author:

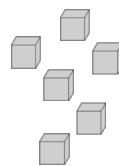
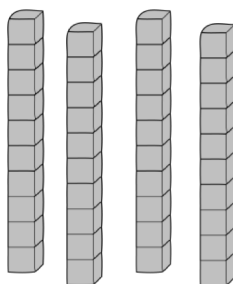
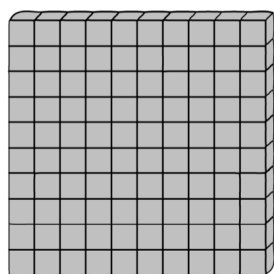


1. _____
2. _____
3. _____
4. _____
5. _____
6. _____
7. _____
8. _____
9. _____
10. _____
11. _____
12. _____
13. _____
14. _____

PLACE VALUE REVIEW



Sydney has these blocks. She gets 8 more ones and two more tens. How many blocks does she have now? Draw your answer and write the total number of blocks in number form and expanded form.



Number Form

Expanded Form

REFLEXIVE PRONOUNS

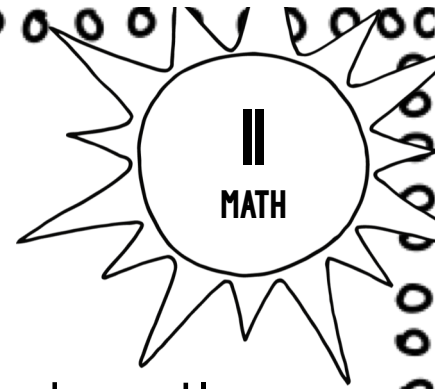
10
GRAMMAR

Complete the sentence using a word from the word box.

you	ourselves	yourselves	it	himself
she	itself	myself	he	themselves
				I

1. I know how to make fruit salad all by _____.
2. My brother prefers to surf by _____.
3. _____ knows how to braid her hair by herself.
4. "Keep your hands to _____" said the lifeguard to the kids.
5. Sometimes my computer turns _____ off.
6. _____ knows how to tie his own shoes.
7. We prefer to walk _____ to the beach without the parents.
8. _____ know how to choose a good book by myself.
9. I think _____ are good at reading to yourself.
10. My sisters locked _____ in the bathroom by mistake.
11. _____ fell off the table all by itself.

PROBLEM SOLVING




1. Lucy put 19 towers on the sandcastle.
Molly put 25 towers on the sandcastle.
How many more towers did Molly put than Lucy?

Number Sentence	Answer

2. Clara has 32 water balloons. She gives 20 away to her friends. How many does she have left?

Number Sentence	Answer

THE BEST THING ABOUT SUMMER IS...



The best thing about summer is _____

because _____

Draw a picture to match your writing.

FAST MATH - ADDITION

13
MATH

Solve these ADDITION problems as fast as you can.

$\begin{array}{r} 2 \\ + 6 \\ \hline \end{array}$	$\begin{array}{r} 5 \\ + 3 \\ \hline \end{array}$	$\begin{array}{r} 2 \\ + 12 \\ \hline \end{array}$	$\begin{array}{r} 3 \\ + 7 \\ \hline \end{array}$	$\begin{array}{r} 2 \\ + 7 \\ \hline \end{array}$	$\begin{array}{r} 13 \\ + 2 \\ \hline \end{array}$	$\begin{array}{r} 4 \\ + 8 \\ \hline \end{array}$	$\begin{array}{r} 2 \\ + 16 \\ \hline \end{array}$
---	---	--	---	---	--	---	--

$\begin{array}{r} 4 \\ + 9 \\ \hline \end{array}$	$\begin{array}{r} 8 \\ + 5 \\ \hline \end{array}$	$\begin{array}{r} 5 \\ + 5 \\ \hline \end{array}$	$\begin{array}{r} 12 \\ + 4 \\ \hline \end{array}$	$\begin{array}{r} 15 \\ + 2 \\ \hline \end{array}$	$\begin{array}{r} 4 \\ + 8 \\ \hline \end{array}$	$\begin{array}{r} 13 \\ + 4 \\ \hline \end{array}$	$\begin{array}{r} 16 \\ + 3 \\ \hline \end{array}$
---	---	---	--	--	---	--	--

$\begin{array}{r} 5 \\ + 9 \\ \hline \end{array}$	$\begin{array}{r} 13 \\ + 6 \\ \hline \end{array}$	$\begin{array}{r} 7 \\ + 5 \\ \hline \end{array}$	$\begin{array}{r} 13 \\ + 6 \\ \hline \end{array}$	$\begin{array}{r} 12 \\ + 7 \\ \hline \end{array}$	$\begin{array}{r} 6 \\ + 4 \\ \hline \end{array}$	$\begin{array}{r} 9 \\ + 7 \\ \hline \end{array}$	$\begin{array}{r} 6 \\ + 6 \\ \hline \end{array}$
---	--	---	--	--	---	---	---

$\begin{array}{r} 8 \\ + 5 \\ \hline \end{array}$	$\begin{array}{r} 12 \\ + 8 \\ \hline \end{array}$	$\begin{array}{r} 7 \\ + 8 \\ \hline \end{array}$	$\begin{array}{r} 9 \\ + 10 \\ \hline \end{array}$	$\begin{array}{r} 9 \\ + 7 \\ \hline \end{array}$	$\begin{array}{r} 9 \\ + 8 \\ \hline \end{array}$	$\begin{array}{r} 9 \\ + 6 \\ \hline \end{array}$	$\begin{array}{r} 8 \\ + 8 \\ \hline \end{array}$
---	--	---	--	---	---	---	---

$\begin{array}{r} 7 \\ + 9 \\ \hline \end{array}$	$\begin{array}{r} 6 \\ + 12 \\ \hline \end{array}$	$\begin{array}{r} 10 \\ + 6 \\ \hline \end{array}$	$\begin{array}{r} 7 \\ + 9 \\ \hline \end{array}$	$\begin{array}{r} 10 \\ + 6 \\ \hline \end{array}$	$\begin{array}{r} 11 \\ + 4 \\ \hline \end{array}$	$\begin{array}{r} 12 \\ + 5 \\ \hline \end{array}$	$\begin{array}{r} 7 \\ + 9 \\ \hline \end{array}$
---	--	--	---	--	--	--	---

VERB SEARCH!

14
GRAMMAR

Choose a book and find 14 different verbs (action words). Write the verbs in the space below.

Book Title:

Author:

1. _____

2. _____

3. _____

4. _____

5. _____

6. _____

7. _____

8. _____

9. _____


10. _____

11. _____


12. _____

13. _____

14. _____



PROBLEM SOLVING



1. Luke threw 30 water balloons at his older brother. 17 of his water balloons missed his brother. The rest hit him. How many hit him?

Number Sentence	Answer

2. Thirteen kids can be in the swimming class at one time. 24 kids want to be in the swimming class. How many kids will not be able to join the swimming class?

Number Sentence	Answer

CONTEXT CLUES

16
READING

The following stories have make-believe words. Use the clues in the sentence to figure out the meaning of the make-believe word.

Last summer I went to the beach with my grandma. She loves to look for sнарples hidden in the sand. Her favorite kind of sнарples are the ones that have no broken pieces. The coolest sнарples I found still had a small crab living inside. I left that sнарples on the beach instead of putting it in my collection.

What do you think sнарples are?

What words help you figure out the meaning of the word sнарples?

It was the hottest day of the summer so Lucy and Susie decided to sell some refreshing blarling on the street outside their house. They sold cups of the ice cold blarling outside their house. Susie picked fresh fruit from a tree in her yard and Lucy was in charge of getting ice from her house. The drink was a little sour, so they had to add some sugar.

What do you think blarling is?

What words help you figure out the meaning of the word blarling?

"Don't forget to put some clinket on before you go outside" said Claudio's mother. Claudio did not like to wear clinket because the lotion sometimes gets in his eyes and stings. But, clinket is important so that you do not get a sunburn so he rubs it all over his skin. Claudio had a painful sunburn last summer so now he has learned his lesson and wears clinket whenever he is playing in the sun.

What do you think clinket are?

What words help you figure out the meaning of the word clinket?

PROBLEM SOLVING

17
MATH

Add.

$$\begin{array}{r} 38 \\ + 25 \\ \hline \end{array}$$

Write a matching
SUBTRACTION problem.

Add.

$$\begin{array}{r} 18 \\ + 29 \\ \hline \end{array}$$

Write a matching
SUBTRACTION problem.

Add.

$$\begin{array}{r} 39 \\ + 54 \\ \hline \end{array}$$

Write a matching
SUBTRACTION problem.

Subtract.

$$\begin{array}{r} 43 \\ - 16 \\ \hline \end{array}$$

Write a matching
ADDITION problem.

Subtract.

$$\begin{array}{r} 62 \\ - 27 \\ \hline \end{array}$$

Write a matching
ADDITION problem.

Subtract.

$$\begin{array}{r} 85 \\ - 36 \\ \hline \end{array}$$

Write a matching
ADDITION problem.

BOOK RESPONSE:

Character Changes

18
READING

Read a fiction book at your reading level and respond to it below.


Book Title: _____

Name of Main Character: _____

What was the main event or challenge in this book?

How did the main character respond to the event or challenge?

PLACE VALUE



DRAW BASE TEN BLOCKS TO SHOW

125

A large, empty rectangular box with a black border, intended for drawing base ten blocks to represent the number 125.

SENTENCE TYPES

20
GRAMMAR



Write a short sentence to match the picture

Write a longer and more descriptive sentence to match the picture

Change the order of your words to tell about the picture in another way that makes sense.

FAST MATH - ADDITION

21

MATH

Solve these ADDITION problems as fast as you can.

$$\begin{array}{r} 4 \\ + 9 \\ \hline \end{array}$$

$$\begin{array}{r} 4 \\ + 8 \\ \hline \end{array}$$

$$\begin{array}{r} 5 \\ + 12 \\ \hline \end{array}$$

$$\begin{array}{r} 6 \\ + 7 \\ \hline \end{array}$$

$$\begin{array}{r} 7 \\ + 3 \\ \hline \end{array}$$

$$\begin{array}{r} 12 \\ + 4 \\ \hline \end{array}$$

$$\begin{array}{r} 2 \\ + 9 \\ \hline \end{array}$$

$$\begin{array}{r} 4 \\ + 14 \\ \hline \end{array}$$

$$\begin{array}{r} 2 \\ + 8 \\ \hline \end{array}$$

$$\begin{array}{r} 13 \\ + 4 \\ \hline \end{array}$$

$$\begin{array}{r} 9 \\ + 7 \\ \hline \end{array}$$

$$\begin{array}{r} 11 \\ + 5 \\ \hline \end{array}$$

$$\begin{array}{r} 14 \\ + 3 \\ \hline \end{array}$$

$$\begin{array}{r} 3 \\ + 9 \\ \hline \end{array}$$

$$\begin{array}{r} 13 \\ + 5 \\ \hline \end{array}$$

$$\begin{array}{r} 12 \\ + 6 \\ \hline \end{array}$$

$$\begin{array}{r} 5 \\ + 9 \\ \hline \end{array}$$

$$\begin{array}{r} 15 \\ + 3 \\ \hline \end{array}$$

$$\begin{array}{r} 11 \\ + 5 \\ \hline \end{array}$$

$$\begin{array}{r} 11 \\ + 4 \\ \hline \end{array}$$

$$\begin{array}{r} 13 \\ + 6 \\ \hline \end{array}$$

$$\begin{array}{r} 7 \\ + 4 \\ \hline \end{array}$$

$$\begin{array}{r} 12 \\ + 6 \\ \hline \end{array}$$

$$\begin{array}{r} 7 \\ + 8 \\ \hline \end{array}$$

$$\begin{array}{r} 12 \\ + 4 \\ \hline \end{array}$$

$$\begin{array}{r} 13 \\ + 4 \\ \hline \end{array}$$

$$\begin{array}{r} 7 \\ + 9 \\ \hline \end{array}$$

$$\begin{array}{r} 8 \\ + 9 \\ \hline \end{array}$$

$$\begin{array}{r} 11 \\ + 8 \\ \hline \end{array}$$

$$\begin{array}{r} 8 \\ + 8 \\ \hline \end{array}$$

$$\begin{array}{r} 9 \\ + 7 \\ \hline \end{array}$$

$$\begin{array}{r} 6 \\ + 8 \\ \hline \end{array}$$

$$\begin{array}{r} 7 \\ + 12 \\ \hline \end{array}$$

$$\begin{array}{r} 6 \\ + 8 \\ \hline \end{array}$$

$$\begin{array}{r} 10 \\ + 5 \\ \hline \end{array}$$

$$\begin{array}{r} 5 \\ + 8 \\ \hline \end{array}$$

$$\begin{array}{r} 11 \\ + 8 \\ \hline \end{array}$$

$$\begin{array}{r} 6 \\ + 4 \\ \hline \end{array}$$

$$\begin{array}{r} 11 \\ + 4 \\ \hline \end{array}$$

$$\begin{array}{r} 5 \\ + 9 \\ \hline \end{array}$$

PREFIXES

22
GRAMMAR

Compare the two words. How did the meaning of the word change when the prefix was added?

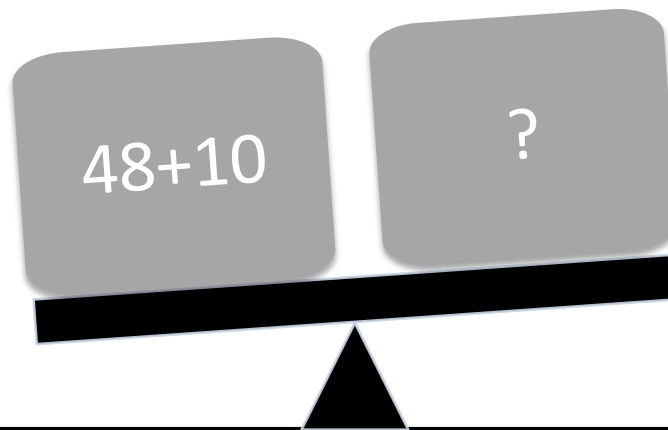
fair	unfair	How did adding "UN" change the meaning of the word?
build	rebuild	How did adding "RE" change the meaning of the word?
connect	disconnect	How did adding "DIS" change the meaning of the word?
understand	misunderstand	How did adding "MIS" change the meaning of the word?

BALANCED EQUATIONS

23

MATH

IN THE BOTTOM BOX, DRAW THE BLOCKS YOU NEED TO BALANCE THIS EQUATION



ROOT WORDS

24
GRAMMAR

All of the words below have a "root word". Write the root word.
For example, in uncomfortable - "comfort" is the root word.

additional	
carefully	
unhappy	
unsuitable	
faithful	
precaution	
freezer	

Take a look at these "root words". How many new words can
you "grow" from each root word?
For example, from **light** you can grow **lighter** and **lightest**.

love	
dark	
great	
big	

ARRAYS

25
MATH

1. There are 6 students in the outdoor club. The leader gives each student 3 pencils. How many pencils did the leader give to the students?

Include a drawing of an array to match this question. Write addition sentence to represent your work.

Matching Addition Sentence	Answer

2. Mr. Florea gave away 25 pieces of candy to 5 students. How many pieces of candy did each student get?

Include a drawing of an array to match this question. Write an addition sentence to represent your work.

Matching Addition Sentence	Answer

IF I COULD GO ANYWHERE...

26
WRITING

If I could go anywhere on summer vacation, I would go to _____

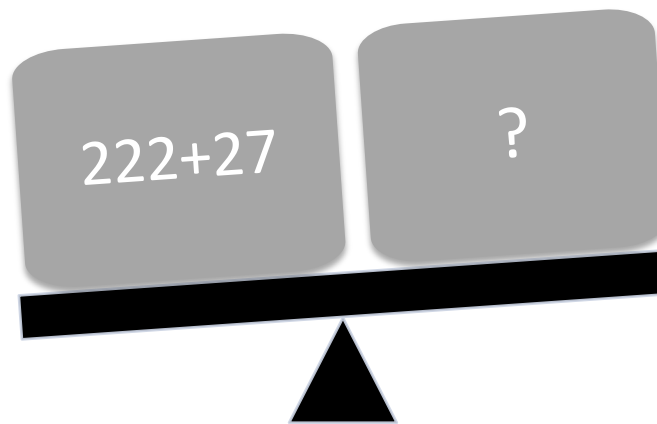
because _____

Draw a picture to match your writing.

BALANCED EQUATIONS

27
MATH

IN THE BOTTOM BOX, DRAW THE BLOCKS YOU NEED TO BALANCE THIS EQUATION



CAUSE AND EFFECT

28
READING

CAUSE: An event that happens.

EFFECT: An event that happens after the cause.

Read each sentence. Find the cause and effect.

Since it was sunny outside, Mia wore shorts.

Cause: _____


Effect: _____



The water in the pool was cold so we got out and sat in the sun.

Cause: _____

Effect: _____



I got a blister on my foot after walking all day.

Cause: _____

Effect: _____



A sunflower plant grew in my yard after I planted the seeds.

Cause: _____

Effect: _____



Claudio turned off the TV when his mother told him to go outside.

Cause: _____

Effect: _____





BALANCED EQUATIONS

29



MATH

SUBTRACT



$$-11 = \square$$

ADD



$$+24 = \square$$

PROPER NOUNS

30
GRAMMAR

Read the words in each box.

Circle the word or phrase in each box that is a proper noun and needs a capital letter.

Hint: Names of people, products names, and proper names of places are all proper nouns

nintendo doll car	map maria marbles	beach california sand
susie surfboard saltwater	disneyland waterpark slide	lemonade driving spring street
chipmunk simon singing	pepsi water ice cube	miss swanson teacher vacation

Write a sentence that includes two proper nouns:

FAST MATH - SUBTRACTION

31
MATH

Solve these SUBTRACTION problems as fast as you can.

$\begin{array}{r} 12 \\ -2 \\ \hline \end{array}$	$\begin{array}{r} 14 \\ -1 \\ \hline \end{array}$	$\begin{array}{r} 20 \\ -1 \\ \hline \end{array}$	$\begin{array}{r} 11 \\ -7 \\ \hline \end{array}$	$\begin{array}{r} 12 \\ -1 \\ \hline \end{array}$	$\begin{array}{r} 14 \\ -2 \\ \hline \end{array}$	$\begin{array}{r} 11 \\ -2 \\ \hline \end{array}$	$\begin{array}{r} 12 \\ -2 \\ \hline \end{array}$
---	---	---	---	---	---	---	---

$\begin{array}{r} 16 \\ -4 \\ \hline \end{array}$	$\begin{array}{r} 14 \\ -3 \\ \hline \end{array}$	$\begin{array}{r} 9 \\ -3 \\ \hline \end{array}$	$\begin{array}{r} 13 \\ -4 \\ \hline \end{array}$	$\begin{array}{r} 11 \\ -3 \\ \hline \end{array}$	$\begin{array}{r} 8 \\ -4 \\ \hline \end{array}$	$\begin{array}{r} 7 \\ -4 \\ \hline \end{array}$	$\begin{array}{r} 17 \\ -3 \\ \hline \end{array}$
---	---	--	---	---	--	--	---

$\begin{array}{r} 14 \\ -5 \\ \hline \end{array}$	$\begin{array}{r} 9 \\ -6 \\ \hline \end{array}$	$\begin{array}{r} 12 \\ -6 \\ \hline \end{array}$	$\begin{array}{r} 13 \\ -5 \\ \hline \end{array}$	$\begin{array}{r} 12 \\ -5 \\ \hline \end{array}$	$\begin{array}{r} 9 \\ -5 \\ \hline \end{array}$	$\begin{array}{r} 11 \\ -4 \\ \hline \end{array}$	$\begin{array}{r} 20 \\ -6 \\ \hline \end{array}$
---	--	---	---	---	--	---	---

$\begin{array}{r} 11 \\ -8 \\ \hline \end{array}$	$\begin{array}{r} 14 \\ -7 \\ \hline \end{array}$	$\begin{array}{r} 12 \\ -7 \\ \hline \end{array}$	$\begin{array}{r} 9 \\ -7 \\ \hline \end{array}$	$\begin{array}{r} 18 \\ -8 \\ \hline \end{array}$	$\begin{array}{r} 10 \\ -7 \\ \hline \end{array}$	$\begin{array}{r} 8 \\ -7 \\ \hline \end{array}$	$\begin{array}{r} 19 \\ -8 \\ \hline \end{array}$
---	---	---	--	---	---	--	---

$\begin{array}{r} 19 \\ -9 \\ \hline \end{array}$	$\begin{array}{r} 16 \\ -9 \\ \hline \end{array}$	$\begin{array}{r} 14 \\ -9 \\ \hline \end{array}$	$\begin{array}{r} 19 \\ -10 \\ \hline \end{array}$	$\begin{array}{r} 13 \\ -9 \\ \hline \end{array}$	$\begin{array}{r} 15 \\ -10 \\ \hline \end{array}$	$\begin{array}{r} 11 \\ -9 \\ \hline \end{array}$	$\begin{array}{r} 14 \\ -10 \\ \hline \end{array}$
---	---	---	--	---	--	---	--

BOOK RESPONSE: Ask Questions

32
READING

Read a fiction book at your reading level and respond to it below. As you read, write down the questions you notice yourself asking.

Book Title: _____

WHO?

WHAT?

WHY?

HOW?

WHERE?

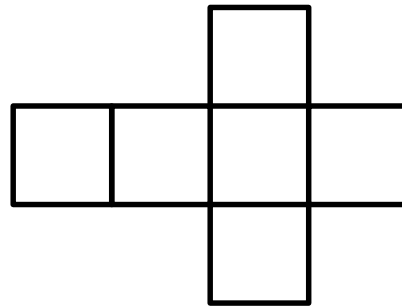
GEOMETRY

33

MATH

1. Draw a shape with five angles.

2. What solid figure could you make?



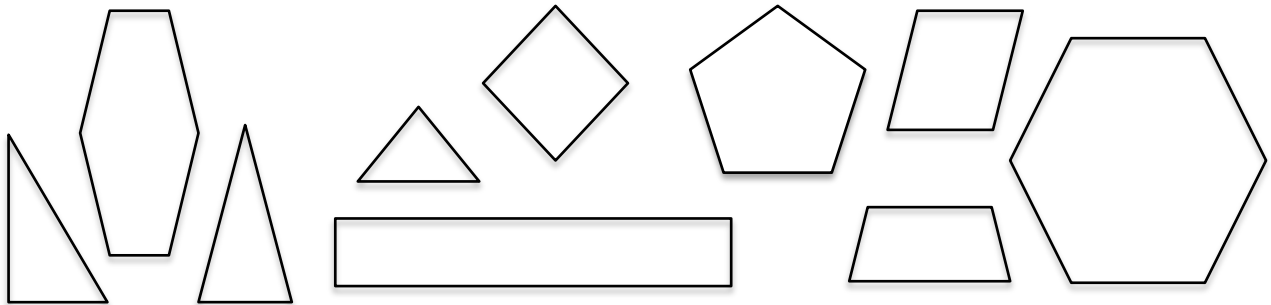
What do you call this shape? _____

Name of figure _____

How many sides does it have ? _____

Number of equal faces _____

3. Color all of the quadrilaterals BLUE.
Color all of the hexagons RED.



What are the names of the shapes have you not colored?

Describe some of the things you smell in the summer. Include at least four sentences.

[illegible]

GEOMETRY

35
MATH

Miss Swanson wants to design a garden in her backyard. The space is in the shape of a rectangle. She wants to plant the following types of vegetables: carrots, lettuce, beans, squash, basil, corn, tomatoes, and potatoes. She wants her garden to have an equal amount of space for each of the vegetables. Draw out a plan for how she could design her garden below.

carrots
lettuce
beans
squash
basil
corn
tomatoes
potatoes

How many vegetable sections are there in her garden?



BOOK RESPONSE:

Beginning, Middle, End

Read a fiction book at your reading level and respond to it below.

36
READING

Book Title: _____

THE BEGINNING OF THE STORY:

THE MIDDLE OF THE STORY:

THE END OF THE STORY:

PROBLEM SOLVING

37

MATH

Noel has 68 baseball cards in his collection. His dad decides to give him 25 cards from his old collection. How many cards does Noel have in his collection now?

Use the space below to solve the problem.

Answer

Cybil has 53 rocks in her collection. She donates 35 rocks to a museum. How many does she have left?

Use the space below to solve the problem.

Answer

SENTENCE OR FRAGMENT?

38
GRAMMAR

Circle the COMPLETE sentences.

Cross out the incomplete sentence FRAGMENTS.

HINT: There are FIVE complete sentences and SEVEN fragments.

The kitten is playing.	At the swimming pool.	On the white porch.
Kyle turned off the TV.	Do you like waterslides?	Drippy ice cream.
Fran's favorite shoes.	Fran's shoes are on the porch.	The huge red beach ball.
Do you have shorts?	Outside by the big barn.	Laughing and playing at the beach.

FAST MATH - SUBTRACTION

39
MATH

Solve these SUBTRACTION problems as fast as you can.

$\begin{array}{r} 12 \\ - 6 \\ \hline \end{array}$	$\begin{array}{r} 15 \\ - 4 \\ \hline \end{array}$	$\begin{array}{r} 19 \\ - 3 \\ \hline \end{array}$	$\begin{array}{r} 12 \\ - 7 \\ \hline \end{array}$	$\begin{array}{r} 12 \\ - 4 \\ \hline \end{array}$	$\begin{array}{r} 16 \\ - 2 \\ \hline \end{array}$	$\begin{array}{r} 13 \\ - 3 \\ \hline \end{array}$	$\begin{array}{r} 14 \\ - 2 \\ \hline \end{array}$
--	--	--	--	--	--	--	--

$\begin{array}{r} 13 \\ - 4 \\ \hline \end{array}$	$\begin{array}{r} 15 \\ - 3 \\ \hline \end{array}$	$\begin{array}{r} 8 \\ - 4 \\ \hline \end{array}$	$\begin{array}{r} 15 \\ - 4 \\ \hline \end{array}$	$\begin{array}{r} 12 \\ - 3 \\ \hline \end{array}$	$\begin{array}{r} 8 \\ - 6 \\ \hline \end{array}$	$\begin{array}{r} 12 \\ - 4 \\ \hline \end{array}$	$\begin{array}{r} 11 \\ - 3 \\ \hline \end{array}$
--	--	---	--	--	---	--	--

$\begin{array}{r} 14 \\ - 6 \\ \hline \end{array}$	$\begin{array}{r} 9 \\ - 7 \\ \hline \end{array}$	$\begin{array}{r} 13 \\ - 6 \\ \hline \end{array}$	$\begin{array}{r} 14 \\ - 5 \\ \hline \end{array}$	$\begin{array}{r} 12 \\ - 8 \\ \hline \end{array}$	$\begin{array}{r} 9 \\ - 6 \\ \hline \end{array}$	$\begin{array}{r} 15 \\ - 4 \\ \hline \end{array}$	$\begin{array}{r} 20 \\ - 7 \\ \hline \end{array}$
--	---	--	--	--	---	--	--

$\begin{array}{r} 14 \\ - 8 \\ \hline \end{array}$	$\begin{array}{r} 14 \\ - 5 \\ \hline \end{array}$	$\begin{array}{r} 10 \\ - 7 \\ \hline \end{array}$	$\begin{array}{r} 9 \\ - 8 \\ \hline \end{array}$	$\begin{array}{r} 18 \\ - 6 \\ \hline \end{array}$	$\begin{array}{r} 10 \\ - 6 \\ \hline \end{array}$	$\begin{array}{r} 18 \\ - 7 \\ \hline \end{array}$	$\begin{array}{r} 19 \\ - 6 \\ \hline \end{array}$
--	--	--	---	--	--	--	--

$\begin{array}{r} 15 \\ - 9 \\ \hline \end{array}$	$\begin{array}{r} 16 \\ - 7 \\ \hline \end{array}$	$\begin{array}{r} 15 \\ - 9 \\ \hline \end{array}$	$\begin{array}{r} 19 \\ - 4 \\ \hline \end{array}$	$\begin{array}{r} 15 \\ - 9 \\ \hline \end{array}$	$\begin{array}{r} 15 \\ - 3 \\ \hline \end{array}$	$\begin{array}{r} 13 \\ - 9 \\ \hline \end{array}$	$\begin{array}{r} 15 \\ - 8 \\ \hline \end{array}$
--	--	--	--	--	--	--	--

BOOK RESPONSE:




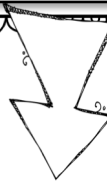
Parts of a Story

40
READING

Read a fiction book at your reading level and respond to it below.

Book Title: _____

THE CHARACTERS:

A rectangular box with a decorative scalloped border. It contains a smaller empty rectangular box at the bottom for notes.A rectangular box with a decorative scalloped border. It contains a smaller empty rectangular box at the bottom for notes.A rectangular box with a decorative scalloped border. It contains a smaller empty rectangular box at the bottom for notes.

Describe how this character acts or feels.

ARRAYS

4
MATH

1. Four children are roasting marshmallows. Each child has 6 marshmallows on a stick. How many marshmallows are there? Show your thinking with an array.

marshmallows

Write an addition sentence to match.

2. Miss Clark is making snacks for the kids. There are three plates. She puts four apple slices on each plate. How many apple slices are there in all?

apple slices in all

Write an addition sentence to match.

3. Four cooks make a pot of spaghetti. Each pot makes four plates of spaghetti. Draw a picture or array to match this story. Then write the addition sentence.

Write an addition sentence to match this array.

4. Show a rectangular array for 15 squares.

Write an addition sentence to match this array.

FAVORITE SEASON

42
WRITING

What is your favorite season? Fall, winter, spring, or summer?
Tell three reasons why this is your favorite season. Use complete sentences.


My favorite season is _____

Reason #1

Reason #2 _____

Reason #3 _____

PROBLEM SOLVING



Sarah has a box of 36 crayons. Her sister has a box of 48 crayons. How many crayons do they have in all?

Number Sentence	Answer

There are 18 girls and 24 boys at the soccer game. How many boys and girls are there altogether?

Number Sentence	Answer

ADJECTIVE SEARCH!

44
GRAMMAR

Choose a book and find 14 different adjectives (describing words). Write the adjectives in the space below.

Book Title:

Author:

1. _____

2. _____

3. _____

4. _____

5. _____

6. _____

7. _____

8. _____

9. _____


10. _____

11. _____

12. _____

13. _____

14. _____



ADDING THREE NUMBERS

45
MATH

1. Sarah and her friends are at the amusement park. They want to put their points together to buy a toy. Sarah has 27 points. Lisa has 14 points. Camille has 22 points. Sydney has 32 points. How many points do they have altogether?

Use the space below to solve the problem.

Answer

2. Solve: $35 + 25 + 6 + 26$

Use the space below to solve the problem

Answer

CONTRACTIONS

46
GRAMMAR

Read the sentence.

Circle the contraction.

Below, write the contraction and the two words that make the contraction.

Example:

Sydney and Alyssa don't like cold days.

don't = do + not

1. Nacho can't wait to see his cousin.

_____ = _____ + _____

2. Andre doesn't like to go camping without his special sleeping bag.

_____ = _____ + _____

3. They're both excited for the play date.

_____ = _____ + _____

4. Sometimes I'm a nervous when I go swimming in the ocean

_____ = _____ + _____

5. I'm ready to go to the swimming pool.

_____ = _____ + _____

6. Sometimes she's annoyed when her sister plays loud music.

_____ = _____ + _____

7. I looked for my sandals, but they weren't in my closet.

_____ = _____ + _____

ADDING THREE NUMBERS

47

MATH

1. The kids in Alejandro's family love stuffed animals. Alejandro has 23 stuffed animals. His little sister has 14 stuffed animals. His little brother has 26 stuffed animals. How many stuffed animals do they have altogether?

Use the space below to solve the problem.

Answer

2. Solve: $12 + 34 + 12 + 24$

Use the space below to solve the problem.

Answer

BOOK RESPONSE:

Visualize

48
READING

Read a fiction book at your reading level and respond to it below. Choose a place to stop reading, and record what you visualize is happening in the story.

Book Title: _____

I VISUALIZE...

THE AUTHORS WORDS AND PHRASES THAT HELP ME IMAGINE THIS PICTURE ARE...

PROBLEM SOLVING

49

MATH

Add.

$$\begin{array}{r} 47 \\ + 15 \\ \hline \end{array}$$

Write a matching
SUBTRACTION problem..

Add.

$$\begin{array}{r} 68 \\ + 26 \\ \hline \end{array}$$

Write a matching
SUBTRACTION problem..

Add.

$$\begin{array}{r} 56 \\ + 29 \\ \hline \end{array}$$

Write a matching
SUBTRACTION problem..

Subtract.

$$\begin{array}{r} 62 \\ - 25 \\ \hline \end{array}$$

Write a matching
ADDITION problem..

Subtract.

$$\begin{array}{r} 51 \\ - 19 \\ \hline \end{array}$$

Write a matching
ADDITION problem..

Subtract.

$$\begin{array}{r} 70 \\ - 23 \\ \hline \end{array}$$

Write a matching
ADDITION problem..

THE BEST ACTIVITY...

50
WRITING

The best activity on a hot day is _____

because _____

Name: _____

Fluency sentences

Read each sentence 3 times. Put a check ✓ in a box each time you read a sentence.

1 Ben twists off lids off of jars.			
2 They can rest and get some drinks.			
3 Can you please get some stamps now?			
4 You can chop the stump down now.			
5 The tot crept up to her dad.			
6 How did the skunk smell?			
7 The skunk really stinks!			
8 I sat down on a clump of grass.			
9 How many pranks did they pull?			
10 The blimp did not go fast at all.			
11 We must stand to sing many songs.			
12 Russ slept in his cot.			
13 Brad will blend that drink for you.			

Tricky Words: was play time match come before

Review the tricky words. **Box** the welded sounds in each word.
(Hint: **-ang, -ing, -ong, -ung**) Read the story.

The Ping-Pong King

The king was a ping-pong champ! He did play ping-pong all the time. When he won a match, he did ring the gong. His gang did come to see him play. It was a long time before he lost a match. He was sad but did not stop. He did play for a long time until he won a ring. The king was so glad! He sang a song and had a big bash.

Story Review: Circle yes or no.

- | | |
|-----------------------------------|-----------|
| * Have you ever played ping pong? | yes or no |
| * Have you ever won something? | yes or no |
| * Does song rhyme with gong? | yes or no |
| * Was the king happy? | yes or no |

Review the tricky words. **Box** all the welded sounds in each word. Read the story.

The Bunk Fall

Sam was so glad to get a bunk bed for his room when he was ten. He ran to ask a pal over. Sam and his pal can sleep in the bunk beds. Sam had to go on the top bunk. Sam went up the rungs to the top. His long leg did slip and he had a fall from the bunk. Bam! Bang! Plunk! Sam did wish he had wings. He will call for his mom. His mom ran from the hall to Sam's room. Sam did think he had a bump on his leg. His leg hit the wall and his fan when he had the big fall. Sam will thank his mom and his pal and said, "I am o.k."

-er
(superlative)

HOTTER DAYS OF SUMMER

As summer went on, the days got hotter. Tim and Sally found ways to stay cool by drinking cold lemonade and playing in the sprinkler. They even had water balloon fights to beat the heat.



1

How did the days change as summer went on?

2

What did Tim and Sally do to stay cool?

3

What was their favorite way to cool off?

Name _____

Add s or es?

The suffix s is added to most plural nouns, but es is added when a new syllable is formed.

Read the word and decide what suffix to use.

Example: kiss + es = kisses



Example: bug + s = bugs



fox + _____ = _____

book + _____ = _____

pillow + _____ = _____

box + _____ = _____

dish + _____ = _____

pig + _____ = _____



The Name

Shane and Kate drove a long time to Pine Lake. Shane and Kate must hike five miles. They must trek to a big, whale-of-a cave and give it an up-to-date name.

The long trek was more or less complete. The square-like shape of the cave was next to a huge shrub. Ten strides left, nine, seven, six, five... Shane and Kate had smiles while close to the cave gate. The gate was made of branches. Shane and Kate had to think of a name for the cave. Kate could scribe the name with the use of mud and a stick. She must jot the name on a fake white plate.

The name that Shane and Kate chose for the cave was...





The Name: Comprehension

1. What name should they give this cave?

2. Who will scribe the name of the cave?

3. Which lake did Shane and Kate drive to?

4. Describe the cave.


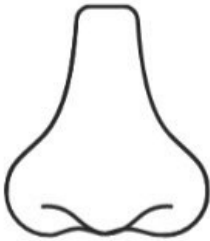



5. Underline the Magic E words you see in this passage.



Name _____

LONG AND SHORT VOWELS

Tick (x) in the correct boxes

Words	Long	Shurt
 e gg	X	
 n ose		
 r ose		
 p en		
 h ome		

TEAM IE

Feed Him Flies



My baby brother always cries! One time, I gave him a whole pie to make him happy. I got in BIG trouble! Another time I tried to make him laugh with dad's tie. I accidentally tied him up. I got in BIG trouble, AGAIN! Mom just pats him on the back and feeds him potpies. I think she should try feeding him fried flies. Do you have a baby brother? I can share mine!



- 1 Color a smiley face after reading the story
- 2 Read the story a second time Circle or highlight all of the ie words Color the second smiley face
- 3 Who is telling the story? How do you know?

4 How do you think the older sibling feels about his or her baby brother?

5 What does the baby brother eat?

- 6 Read the story a third time Use expression! Color the third smiley face _____
- 7 Write an adjective from the story _____

FIND IT! WRITE IT!

Write all of the ie words from the story.

This image shows a full page of handwriting practice paper. It contains ten identical sets of horizontal guidelines arranged vertically. Each set is composed of three lines: a solid top line, a dashed middle line, and a solid bottom line, providing a structured space for practicing letter formation and alignment.

Name _____



Directions: Read the story. Underline all the words with "ar" in it. Circle the correct answers to the questions below.

We like to visit a farm far away. This farm is not like most farms. We see funny things at the farm. You can see sharks at this farm. The sharks like to play the harp in the barn. Also, the sharks like to make art in the yard. The sharks work hard in the garden, too. When it is dark, the sharks like to watch the stars sparkle in the sky. After you visit the farm, the sharks will send you a card. The farm is very funny.

1. What is the main idea?
 - a. The sharks work hard in the garden.
 - b. You can see funny things at the farm.
 - c. Sharks like to eat fish.

2. What is NOT a detail from the story?
 - a. The sharks like to play the harp in the barn.
 - b. The shark and hermit crab play games.
 - c. The sharks like to watch the stars sparkle.

*Think about what you see in your mind in this story. Draw a picture of it on the back.

Name _____

Double the Final Consonant Practice

When a word ends in a vowel followed by one consonant, you need to double the final consonant before adding -ing and -ed.

Double the Final Consonant	Don't Double

touch	wait	tip	stay
drip	chop	mark	ram
jog	print	bag	reach

Name _____

Double the Final Consonant Practice

When a word ends in a vowel followed by one consonant, you need to double the final consonant before adding -ing and -ed.

Complete the chart to practice

Base Word	Add <i>-ed</i>	Add <i>-ing</i>
beg		
trap		
mop		
clip		
nod		
pat		
slam		
sob		



R-Controlled Vowel reading passages

A Special Bond

There was a girl named Amber.

She had a pet tiger named Jasper.

Every summer, they went to the park to play.

Amber loved to run and swim in the river.

She built a little house for Jasper.

They enjoyed the sunny weather.



Answer the questions from the story

1. When do Amber and Jasper go to the park?

2. What activities does Amber enjoy doing at the park?

3. What did Amber build for Jasper?



Name: _____

4.2

ee, ea, e



green	beach	feet	bean
treat	keep	me	leap

1. I ate a yummy _____.
2. The _____ has lots of sand.
3. Jack had a magic _____.
4. She will _____ over the fence.
5. _____ is my favorite color.
6. His _____ stink!
7. Please _____ this safe.
8. Come swing with _____!

e-d Makes Three

Directions: The suffix -ed can make three different sounds! Read each word and color the box the same color as it's ending sound.

wanted
picked
buzzed
beeped
needed
cheered
added
camped
filled
ended
passed
loved
lifted
wished

ed Blue

d Red

t Green

S-BLENDS SENTENCES

Directions: Read the sentences. Circle the words that have beginning s-blends.

Tim slid on a red sled.

The lid did slam on the bin.

Pam can mop up the spot on the rug.

A bug sat snug in a rug.

Did Dan slip on the rug?


Can you snap?

Name _____

Set a timer. Read the words as fast as you can.
Record your time. Repeat.

©K. L. Lacy/FirstSchool

Read *for* Speed



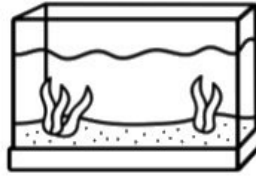
bran	prop	crab	trot	crop
grim	crop	crib	drip	drum
drop	prod	brat	print	trip
grab	trap	trust	grip	drum
grub	grid	grid	drop	frog
crib	grip	trim	brim	trek

Reading #1 Time _____
Reading #2 Time _____
Reading #3 Time _____
Reading #4 Time _____
Reading #5 Time _____



Name: _____ Date: _____

Write each word above the matching picture.



Word
Bank:

honk

stung

tank

strong

ring

wink

skunk

hang

Name: _____

Drop the E to add Suffix

The Fun Day.

One day, Sam and his dog, Max, are playing at the park. Sam is riding his bike. Max is running by his side. They are having fun in the sun! Sam sees a big kite flying in the sky. Sam wants to fly a kite too. He asks his mom to help him. They go to the store and get a kite. Now, Sam is smiling as he is pulling the string. Max is jumping with joy! They are so happy playing together. What a fun day!





1. What does Sam want to fly?





2. Where do Sam and his mom go to get the kite?

3. What might you need to bake a cake?

Name: _____ Date: _____

Fill in the missing blends.

 ____ ee	 ____ ock	 ____ og	 ____ ider
--	---	---	--

 ____ ar	 ____ ower	 ____ ail	 ____ ab
---	---	---	--

Write 3 words that begin with the **st** blend.

1 _____

2 _____

3 _____

Color by Blend

bl = blue

cl = yellow

fl = red

gl = green

clam	flat	glide	class
block	cliff	blimp	flag
glass	blast	flash	clap